


# Fruit Salad

Addition and Reasoning




# Instructions



Hello everyone!  
My name is Chef Maria.  
My favourite food to make is fruit salad.  
Would you like to help me make some?  
Can you help me work out the number of  
ingredients in each bowl?



I don't have any cherries today. How many apple slices are in the bowl?



### Ingredients

0 cherries





5 slices of  
apple

0 add 5 makes 5




Can you put the ingredients in to the bowl?  
How many are there altogether?



1 add 4 makes 5




I think 3 add 2 makes 4. Am I correct? Why?  
Why not?



### Ingredients

 2 slices of  
banana


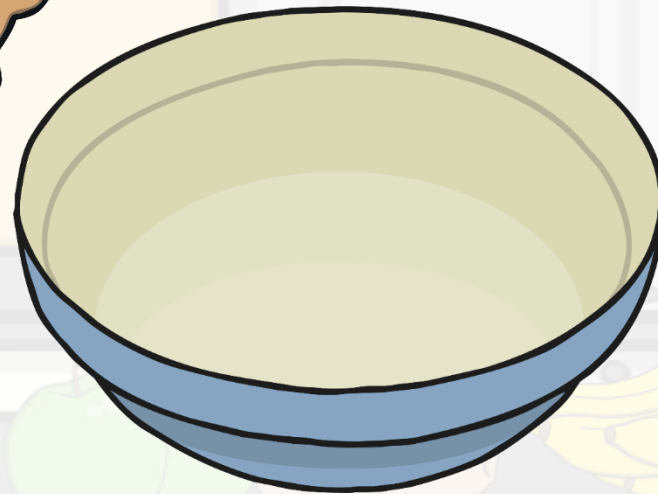
 3 pieces of  
satsuma

2 add 3 makes 5






Do I need to count the grapes first? Does the answer change if I count the strawberries first?



### Ingredients

 3 pieces of grape

2 slices of strawberry




3 add 2 makes 5



I wonder what would happen if I changed the recipe and used 4 slices of apple and 1 slice of strawberry. Would I use the same number of fruit pieces?



### Ingredients

 4 slices of strawberry


1 slice of apple



4 add 1 makes 5



Oh no! I've run out of strawberries! Can you say a number bond sentence about this fruit salad?



### Ingredients



5 pieces of  
satsuma

0 slices of  
strawberry


5 add 0 makes 5




What do you notice about the fruit salads we have made?  
What is the same? What is different?




All of the bowls of fruit salad have 5 pieces of fruit.




$$5 + 0$$




$$1 + 4$$




$$2 + 3$$



$$3 + 2$$



$$4 + 1$$




$$5 + 0$$


Which fruit salad is your favourite? Can you tell a friend a number bond sentence about your favourite fruit salad?




$$\square + \square = 5$$




$$5 + 0$$




$$1 + 4$$




$$2 + 3$$



$$3 + 2$$



$$4 + 1$$



$$5 + 0$$



Thank you for helping to work out  
how many pieces of fruit are in each of  
my fruit salads.



