


Name: _____ Date: _____

Science Assessment : Plants



1. Label the parts of the plant.



flower


leaf

roots

stem

4

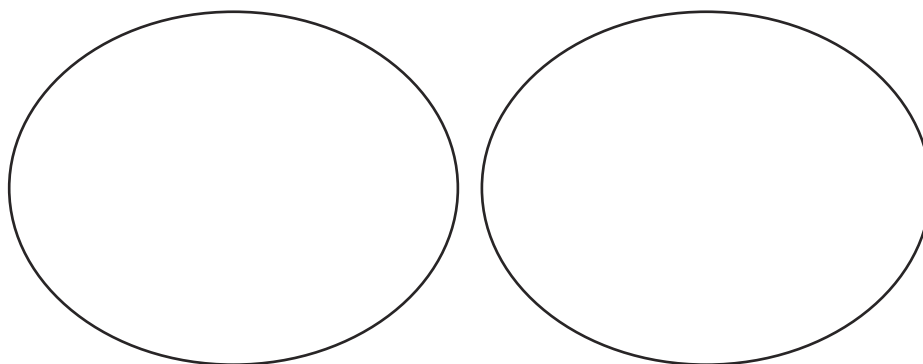
2. Can you name any of these flowers?



4

Total for this page

3. Sort these leaves into two groups.




Why did you make the choice that you did?

4. For these foods, which part of the plant they come from is eaten?

roots	stem	leaves
flower	fruit	seed



5. Draw a line to match the parts of a plant with their job.





Helps to support the plant and carry water to different parts of the plant.

Takes in the water from the soil and keeps the plant in the ground.

Collects sunlight.

6. Which of these trees is evergreen?



How do you know?

3

1

1


Total for this page

7. Circle the part of the plant that a bee is attracted to?

stem flower roots leaves

1

8. Label the parts of a tree.



leaf

fruit


branch

root

trunk

5

9. What will this tree look like in winter? Draw it in the box.



1

10. What does a plant need to survive? Write down two things.

- _____
- _____

2

Total for
this page