


# Year 1 Maths Activity Mat

③


## Section 1

These bananas come in bunches of 5.

How many bananas are there in 2 bunches?



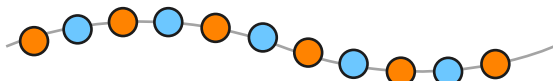
## Section 2



$$\square \times 2 = \square$$

## Section 3


Count the beads and write the number.



## Section 4

I lose 5p.

How much money have I got left?



## Section 5

You cut both the pizzas in half.

How many halves altogether?




## Section 6

Order these numbers correctly.



## Section 7

What time is it? Circle the correct time.



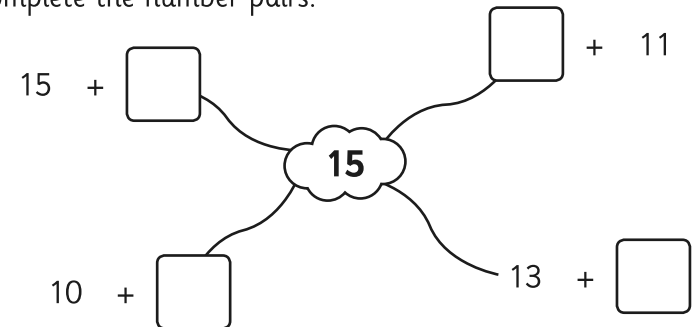
2 o'clock

Half past 2

Half past 12

## Section 8

Complete the number pairs.




## Year 1 Maths Activity Mat: 3

### Answers

#### Section 1


These bananas come in bunches of 5.

How many bananas are there in 2 bunches?



10

#### Section 2



$$\boxed{3} \times 2 = \boxed{6}$$

#### Section 3

Count the beads and write the number.




11

#### Section 4

I lose 5p.

How much money have I got left?



14p

#### Section 5

You cut both the pizzas in half.


How many halves altogether?



4


#### Section 6

Order these numbers correctly.



#### Section 7

What time is it? Circle the correct time.



2 o'clock

Half past 2

Half past 12

#### Section 8

Complete the number pairs.

