

# Fractions

Warm -Up



twinkl



Is it a half?



answer

Yes, it is a half because it is divided into two equal parts.



Is it a half?



answer

No, because it's a whole shape.



Is it a half?

answer

No, because the parts are not equal.



# Is it a half?

Half of the class are girls.  
There are 6 girls.  
How many children are in the class altogether?



# Halve It!

What is half of this amount?





# Halve It!

What is half of this amount?



A cartoon illustration of a young boy with dark skin and short black hair, wearing a pink t-shirt. He is standing with his arms crossed and his hand on his chin, looking thoughtful. He is surrounded by several pizzas on white plates. The pizzas have different toppings: some have tomato slices, some have mushrooms, and some have pepperoni. The background is a light gray with a subtle pattern of pizza slices.

**Halve It!**

What number is  
half of 10?



A cartoon illustration of a young girl with long dark hair, wearing a blue cardigan over a white shirt and a grey skirt. She is standing with her arms crossed and her hand to her chin, appearing to be in deep thought. The background is a light grey surface with several pizzas. One pizza in the center is a square with mushrooms, while the others are round with various toppings like pepperoni, tomatoes, and olives. The pizzas are slightly faded and overlap each other.

Halve It!

What number is  
half of 12?




# Halve It!

What number is  
half of 20?



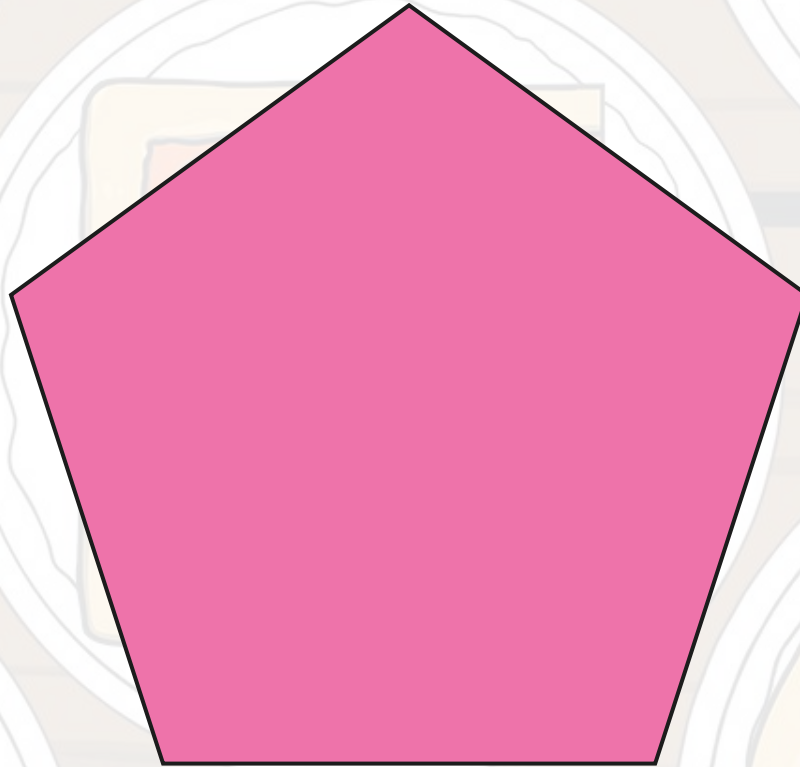
Is it a quarter?



answer

Yes, because it is divided into four equal parts.

Is it a quarter?



answer

No, because it is not divided into four equal parts.



# Is it a quarter?

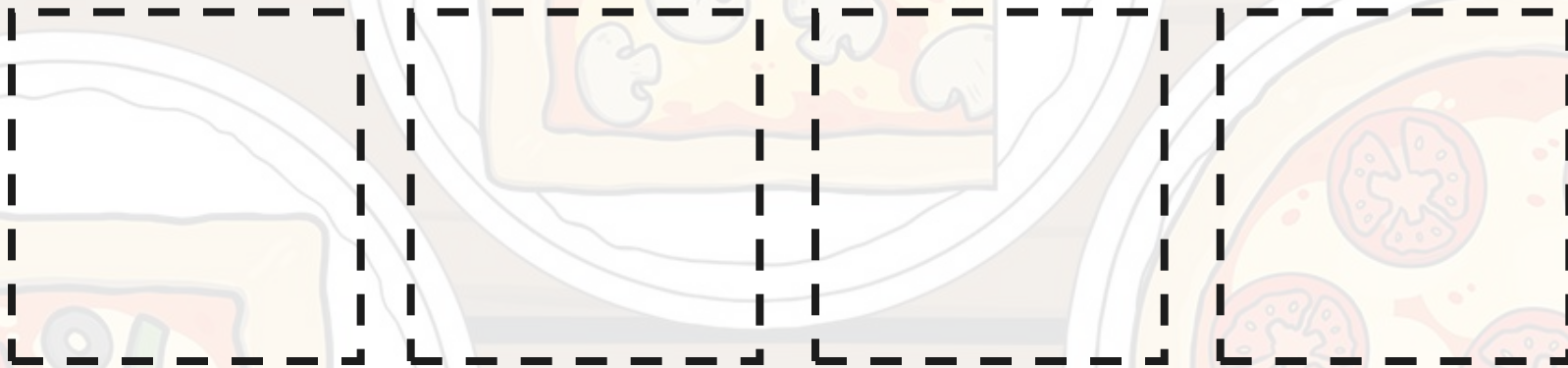

Ruby shared 8 sweets into 4 party bags.  
How many sweets were in each party bag?




answer

# Is it a quarter?

Share the animals equally into the pens.  
How many animals are in each pen?







twinkl