

Transport I Spy and Count Checklist Answers

Count the number of each type of transport and write the numeral in the box.


5

helicopters




1

trains



6

cars




3

ambulances



5

bikes




5

vans



10

scooters




3

aeroplanes



2

buses



7

boats

