

Maths Activity Mat

①


Section 1

What's next?

5	10	15	20			
---	----	----	----	--	--	--

Section 2

Add 1 more flower.



There would be flowers altogether

Section 3

What's the missing number?

$$15 - \square = 5$$



Section 4

Which line is the longest?

A _____

B _____

C _____


Section 5

If Sarah has 14 apples and she shares them equally with Lisa, how many apples will they have each?



Section 6

Colour half of these shapes.



Section 7

Circle the odd numbers:

12

18

13

21

17

11

Section 8

Fill in the boxes:

$$20 + \square = 25$$

$$17 + \square = 23$$

Maths Activity Mat: 1

Answers


Section 1

What's next?

5	10	15	20	25	30	35
---	----	----	----	----	----	----

Section 2

Add 1 more flower.



There would be flowers altogether

Section 3

What's the missing number?

$$15 - \boxed{10} = 5$$



Section 4

Which line is the longest?

A

B

C

C

Section 5



If Sarah has 14 apples and she shares them equally with Lisa, how many apples will they have each?



7

Section 6

Colour half of these shapes.



Section 7

Circle the odd numbers:

12

18

13

17

21

11

Section 8

Fill in the boxes:

$$20 + \boxed{5} = 25$$

$$17 + \boxed{6} = 23$$